

Name: \_\_\_\_\_

## WHAT IS MISSING?

Sometimes it makes sense to count forward to find out what is missing!

There used to be:

And now there are:

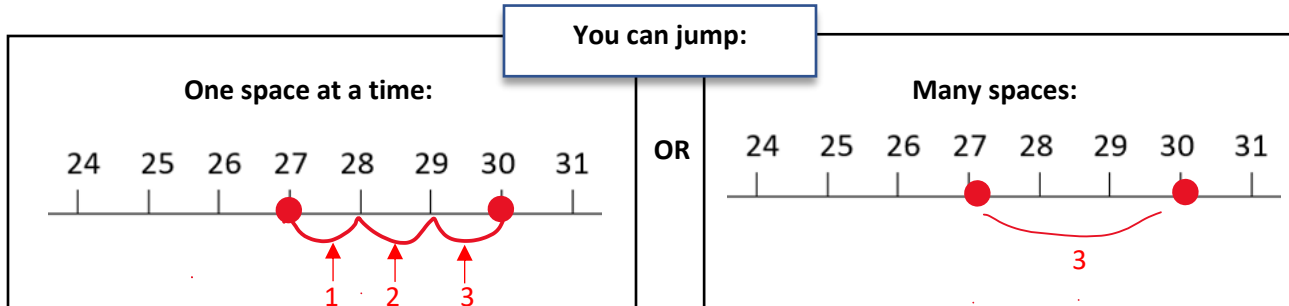
30 

27 

How many are missing?

**Step 1:** draw a dot on 27 and a dot on 30.

**Step 2:** Jump between 27 and 30 to find out what is missing.



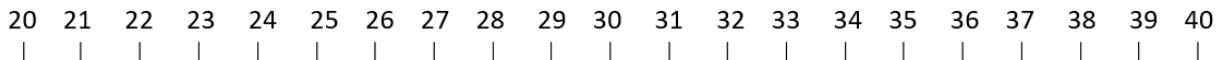
There used to be:

And now there are:

30 

24 

How many are missing?



What did you find? \_\_\_\_\_ blocks are missing!

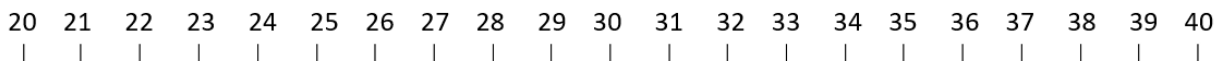
There used to be:

And now there are:

30 

26 

How many are missing?



What did you find? \_\_\_\_\_ blocks are missing!

Name: \_\_\_\_\_

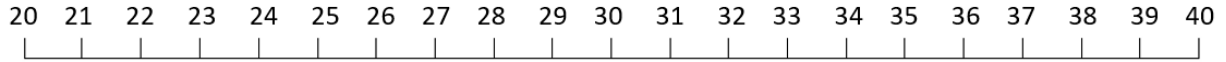
There used to be:

**40** 

And now there are:

**34** 

How many are missing?



What did you find? \_\_\_\_\_ blocks are missing!

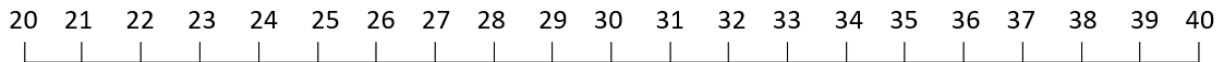
There used to be:

**30** 

And now there are:

**25** 

How many are missing?



What did you find? \_\_\_\_\_ blocks are missing!

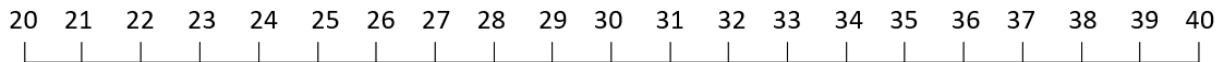
There used to be:

**40** 

And now there are:

**38** 

How many are missing?



What did you find? \_\_\_\_\_ blocks are missing!

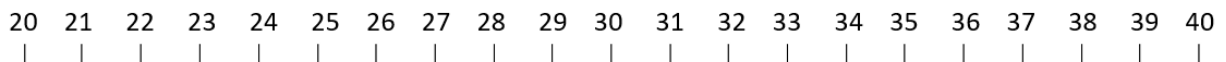
There used to be:

**30** 

And now there are:

**32** 

How many are missing?



What did you find? \_\_\_\_\_ blocks are missing!

Name: \_\_\_\_\_

## WHAT IS MISSING?

Sometimes it makes sense to count back to find out what is missing!

There used to be:

30 

And now there are:

2 

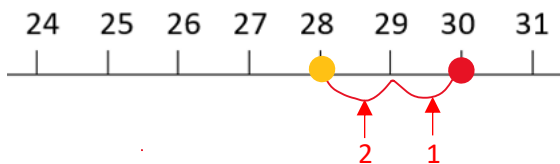
How many are missing?

**Step 1:** draw a dot on 30

**Step 2:** Starting at 30, count back two spaces to find out what is missing

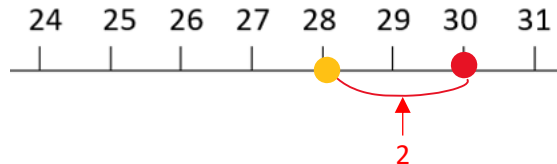
You can count:

One space at a time:



OR

Many spaces:



What did you find? \_\_\_\_\_ blocks are missing!

There used to be:

40 

And now there are:

3 

How many are missing?



What did you find? \_\_\_\_\_ blocks are missing!

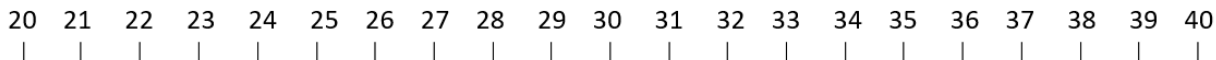
There used to be:

30 

And now there are:

5 

How many are missing?



What did you find? \_\_\_\_\_ blocks are missing!

Name: \_\_\_\_\_

There used to be:

**40** 

And now there are:

**7** 

**How many are missing?**



**What did you find? \_\_\_\_\_ blocks are missing!**

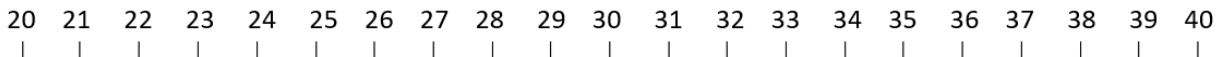
There used to be:

**30** 

And now there are:

**9** 

**How many are missing?**



**What did you find? \_\_\_\_\_ blocks are missing!**

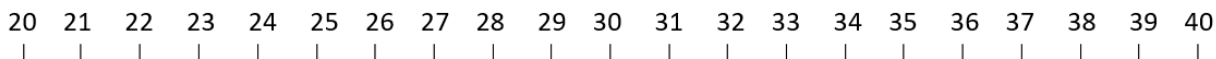
There used to be:

**40** 

And now there are:

**4** 

**How many are missing?**



**What did you find? \_\_\_\_\_ blocks are missing!**

There used to be:

**30** 

And now there are:

**6** 

**How many are missing?**



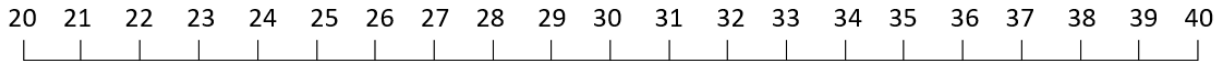
**What did you find? \_\_\_\_\_ blocks are missing!**

Name: \_\_\_\_\_

## WHAT IS MISSING?

Should you count back or forward? Time for you to decide!

Use the number line to jump forward or back in big or small jumps. You can also imagine a number line.



There used to be:      And now there are:

**32**       **27** 

How many are missing? \_\_\_\_\_

Did you count **forward or back**?

There used to be:      And now there are:

**29**       **2** 

How many are missing? \_\_\_\_\_

Did you count **forward or back**?


There used to be:      And now there are:

**39**       **3** 

How many are missing? \_\_\_\_\_

Did you count **forward or back**?


There used to be:      And now there are:

**34**       **28** 

How many are missing? \_\_\_\_\_

Did you count **forward or back**?


There used to be:      And now there are:

**25**       **4** 

How many are missing? \_\_\_\_\_

Did you count **forward or back**?

There used to be:      And now there is:

**35**       **1** 

How many are missing? \_\_\_\_\_

Did you count **forward or back**?

There used to be:      And now there are:

**28**       **24** 

How many are missing? \_\_\_\_\_

Did you count **forward or back**?

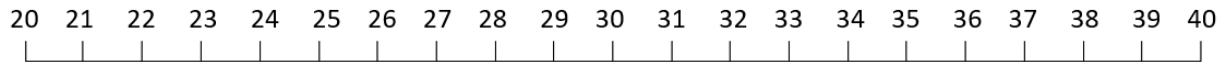
There used to be:      And now there are:

**36**       **31** 



How many are missing? \_\_\_\_\_

Did you count **forward or back**?

Name: \_\_\_\_\_





There used to be:      And now there are:

**33**       **31** 

How many are missing? \_\_\_\_\_

Did you count **forward or back**?



There used to be:      And now there are:

**39**       **2** 

How many are missing? \_\_\_\_\_

Did you count **forward or back**?



There used to be:      And now there are:

**27**       **5** 

How many are missing? \_\_\_\_\_

Did you count **forward or back**?



There used to be:      And now there are:

**31**       **26** 

How many are missing? \_\_\_\_\_

Did you count **forward or back**?



There used to be:      And now there are:

**24**       **3** 

How many are missing? \_\_\_\_\_

Did you count **forward or back**?



There used to be:      And now there are:

**35**       **27** 

How many are missing? \_\_\_\_\_

Did you count **forward or back**?



There used to be:      And now there are:

**33**       **29** 

How many are missing? \_\_\_\_\_

Did you count **forward or back**?



There used to be:      And now there are:

**36**       **4** 

How many are missing? \_\_\_\_\_

Did you count **forward or back**?



There used to be:      And now there are:

**38**       **29** 

How many are missing? \_\_\_\_\_

Did you count **forward or back**?

There used to be:      And now there are:

**26**       **3** 

How many are missing? \_\_\_\_\_

Did you count **forward or back**?